

SANSKAR PUBLIC SCHOOL, RAIGARH

Identity Through Education

KABIR CHOWK, ODISHA ROAD, RAIGARH (C.G.)

SUMMER ASSIGNMENT

2024-25

CLASS - IV

*Keep your child's brain active over break
without let them knowing they are doing
'Homework'*

NAME - _____



Dear Parents,

We wish you and your child a very happy summer holiday. It's time to enjoy and create a bond with family, friends and relatives. To utilize this time in the most constructive way we have prepared Holiday Homework for the students on the principle of "learning by doing" for his/her holistic development.

Kindly ensure that the holiday homework is completed by the students under the guidance of the parents.

WE AIM AT ALL ROUND DEVELOPMENT OF OUR STUDENTS



- ❖ **Physical Development-** Encourage your child to go for a walk outside & play outdoor games.
- ❖ **Language Development-** Encourage your child to converse in English.
- ❖ **Social Emotional & Personal** -Spend time with your child and share feelings.
- ❖ **Cognitive**-Motivate your child to read, write and learn with fun based activity.
- ❖ **Sensory & Motor** -Encourage your child to indulge in art and craft to enhance creativity skills.





**GENERAL INSTRUCTIONS TO BE FOLLOWED WHILE DOING
SUMMER ASSIGNMENT**

- ✚ Assignment should be done as per the instructions.
- ✚ The child will be assessed for the neat handwriting, presentation, creativity and submission of the work on time.
- ✚ MARKS WILL BE INCLUDED IN YOUR SCORECARD.
- ✚ Parents must make their ward revise the syllabus taught in the month of April.
- ✚ Parents can be facilitator at home but the work should be done independently by the child in his/her own handwriting.

Thank You



**hAPPY
summer
hOLIDAYS**



Life Skills

1. Help your parents in household work.
2. Manage your time.
3. Help needy people.
4. Practice English communication.
5. Do your own work.
6. Drink plenty of water and eat healthy food.
7. Save water, electricity and food.
8. Keep yourself clean.
9. Keep your things properly.
10. Do yoga, exercise or meditation daily.





Reading:

Read the following chapter and underline the new words.

- **Unit - II Travel**
Ch-3 A Space Trip

Writing:

- Complete the skill focus of Page no -10 and 11 from your English Grammar Book.

Listening:

- Make a habit of listening to English news.


Speaking

- Prepare a short moral story for speaking.

Cursive Writing

- Write one proverb/thought of the day daily in English Grammar Notebook.
For example -

You can't go back and



ACTIVITY: 1
(WRITTEN ASSESSMENT)

Do this worksheet in your grammar copy



SKILL FOCUS - READING

Read the story below.

One day, a wolf caught a sheep in a field. He looked at the sheep and thought to himself, "What a big, fat sheep! I am going to have a feast tonight." "You can't escape," the cruel wolf said to the sheep. The sheep was clever. He said, "I know I cannot escape."



"But please grant me one last wish before I die."

"What is your last wish?" asked the wolf.

"Sing a song so that I might dance one last time," said the sheep. "Oh that's easy," the wolf said. The wolf threw back his head and began to howl. Hearing him howl, the farmer's dogs rushed to the spot and chased him away. The sheep smiled and said to himself, "How clever I am!"

Answer these questions.

1. Who caught a sheep?

2. What was the sheep's wish?

3. What did the wolf do?

4. Who drove away the wolf?

5. Do you think the sheep was clever? why?

ACTIVITY: 2

Do this worksheet in your grammar copy

Name:

Class:

Date:

Articles: (a, an, the)

Complete the passage with the (a, an, the) then **complete the tasks**:



It was _____ weekend, Larry got out of bed at nine thirty. He went to _____ bathroom, had a wash and got dressed. He went downstairs, made coffee and pancakes for everyone and took it into _____ living room and put them on _____ coffee table next to _____ TV. He does this twice _____ week, as _____ treat for his wife Lara. During _____ week she always gets up early to get _____ kids ready for school. She takes them to school and then she goes to university. She is _____ student and

she is attending _____ art course there. At the moment, their children are still in bed. They went to bed quiet late last night. Later they are going to _____ beach for _____ day. Larry turned on _____ TV to watch _____ episode of Emmerdale. Then he went back to _____ bedroom and opened _____ curtains. Lara was already awake as she could smell _____ pancakes and coffee. Larry is _____ good help around _____ house. He makes everyone breakfast, takes them out and is _____ excellent dad too. They will be leaving _____ house in _____ hour or two to Scarborough. All the children came running into _____ bedroom and sat on _____ bed, all excited about going to _____ beach.

Answer the following in full sentences:

1. Who woke up at nine thirty? _____
2. What did he make? _____
3. Where was his wife? _____
4. Where are they going for the day? _____
5. Where did the children sit before breakfast? _____

ACTIVITY: 3

Do this worksheet in your grammar copy

Nouns

- Sort the nouns into the correct boxes below.

America house class bird running team
love computer Cape Town book singing
peace Monday paper pen family air
swimming crowd Mary flying cup key
commitment phone January group crying chair hate

Proper

Common

Collective

Abstract

Concrete

Gerunds

ACTIVITY: 4

Do the activity in your Grammar book Pg. no. 17

1. Look at the picture and fill in the blanks with proper nouns. Remember to begin with a capital letter.



1. The name of the bank : _____
2. The name of the park : _____
3. The name of the theatre : _____
4. The name of the school : _____
5. The name of the restaurant : _____
6. The name of the complex : _____

LEARNING OUTCOMES

Students will enhance their reading, writing & thinking skill



हिन्दु

पाठ.पठन

पाठ-2 “कोई किसी से कम नहीं” पढ़िए
और कठिन शब्द रेखांकित करिये

लिखित कार्य

1. व्याकरण वाटिका के पृष्ठ संख्या 103 पर दिए गए अपठित गद्यांश को व्याकरण अभ्यास पुस्तिका में लिखकर उसके संदर्भ में पूछे गए प्रश्नों के उत्तर लिखिए। (WRITTEN ASSESSMENT)
2. व्याकरण वाटिका के पृष्ठ संख्या 84 पर दिए गए राबिन और गुंजन, मीरा और यश के बीच के संवाद को साफ तथा सुंदर लिखावट में अपनी व्याकरण पुस्तक में लिखिए।
3. गर्मी की छुट्टियों में आप अपने परिवार के साथ कहाँ घूमने जाएँगे? वहाँ घूमते हुए प्राप्त अनुभवों को बताते हुए एक अनुच्छेद व्याकरण पुस्तिका में लिखिए।

WORKSHEET: 1

Subject Enrichment Task

सुंदर लिखावट में अपनी व्याकरण कॉपी में लिखिए।

वर्ण विचार और उच्चारण

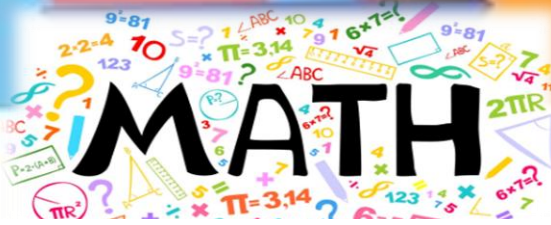
रिक्त स्थान भरें :-

तीन, वर्ण-विच्छेद, वर्णमाला, स्वर,
स्वर तथा व्यंजन, वर्ण

- क) भाषा की सबसे छोटी इकाई _____ कहलाती है।
- ख) वर्णों का व्यवस्थित समूह _____ कहलाता है।
- ग) वर्णों के दो भेद हैं _____ ।
- घ) _____ बिना किसी की सहायता के बोले जाते हैं।
- ङ) स्वर के _____ भेद हैं।
- च) वर्णों को अलग-अलग करके लिखने को _____ कहते हैं।

LEARNING OUTCOMES

छात्र अपने पढ़ने, लिखने और बोलने के कौशल को बढ़ाएंगे।



WORKSHEET

(WRITTEN ASSESSMENT)

1. Write Number name for the following numbers:

i) 56,34,564: _____

ii) 70,46,046: _____

2. Write in numerals for the given number name:

i) Eleven lakh thirty-three thousand six hundred fifty-two: _____

ii) Sixty-two lakh forty thousand seven hundred forty-nine: _____

3. Write the successor of the greatest 6-digit number.

4. Write 67,456; 5,78,324; 88,694; 7,432 in descending order.

5. Find the difference between place value of 7 and 2 in 37,52,871.

6. An examination board conducted three examinations in a year. The examination fees received from these examinations were Rs 43712; Rs 38290 and Rs 80570 respectively. Find the total fees received by the board in that year.

7. The total population of India according to 1981 census was 6815100 out of which 2379932 people were illiterate. How many persons were literate?

8. The cost of a car is Rs. 8980. Find the cost of 75 such cars.

9. The cost of 15 tables is Rs. 14340. What is the cost of each table?

10. If you went for dinner at restaurant along with your family for your birthday celebration. And your father ordered one Shahi Paneer, one Mix Veg Curry and six Butter Naan for dinner from menu of the restaurant given below. Prepare bill of items ordered by your father in the below given table.

VEG MENU		VEG RICE	
VEG			
Panner Tikka Masala	- 160/-	Jeera Rice	- 50/-
Panner Butter Masala	- 70/-	Masala Rice	- 60/-
Shahi Panner	- 120/-	Lemon Rice	- 40/-
Kaju Paneer	- 140/-	Tomato Rice	- 60/-
Special Kaju Masala	- 140/-	Gee Rice	- 60/-
Malai Kupta	- 80/-	Veg Pulow	- 60/-
Palak Paneer	- 55/-		
Mix Veg Curry	- 40/-	ROTI	
Alu Gobi Masala	- 60/-	Butter Naan	- 20/-
Channa Masala	- 60/-	Plain Naan	- 15/-
		Butter Roti	- 15/-

Sr. No.	Name of Items	Quantity	Rate	Amount
			Total	

PROJECT WORK
(SUBJECT ENRICHMENT TASK)

Your surroundings have many items, and try to find out the answer to the given clues on the basis of things of your daily use.

- ❖ Measure the dimensions of the following things at your home.
 A window A cupboard
 A door A room floor
- ❖ Measure the height of each family member and name the person with shortest and tallest height with their measurement in centimetres.

S. No.	Name of the family member/Relations	Their height
1		
2		
3		
4		
5		

Write Tables 11 to 20 in your Mathematics Notebook

CASE BASED

Do it in your math notebook -

India is a great place for manufacturing because it has low labour costs and excellent technical and engineering skills, which result in better-quality products being made. The "Television World Factory" has been selling a large number of TV sets. The annual sales report of the factory shows remarkable figures. The first quarter sales were 7,483 TV sets, the second quarter sales were 9,817 TV sets, the third quarter sales were 8,715 TV sets, and the fourth quarter sales were 12,698 TV sets. Based on the above information.

Answer the following questions:

- Arrange these quarterly sales figures in ascending order.
- In which quarter, the sale was lowest?
- Find the sum of the place value of digits 2 and 6 in the number of TV sets sold in the fourth quarter.
- Round off the given numbers to its nearest 10, 100 and 1000.

MATHS CROSSWORD

Solve the following puzzle in your math notebook -

Multiplication crossword puzzles

4	x	4	=						
		x							
			x	6	=				
x			=		x				
6	x	6	=			x	8	=	80
=					=				
60									

9	x	3	=						
		x							
			x	5	=				
x			=		x				
4	x	6	=			x	6	=	18
=					=				
32									


LEARNING OUTCOMES

Students will develop their analytical and problem solving skills.



ACTIVITY: 1 SCIENCE HACKS(TRY IT YOURSELF!)

Take two glasses with water. Add some colour to one of the glasses. Put small plants with roots and flowers in both the glasses. After a few days, notice the change in colour of the flowers of the plant that are dipped in coloured water. Note down your observation in notebook.



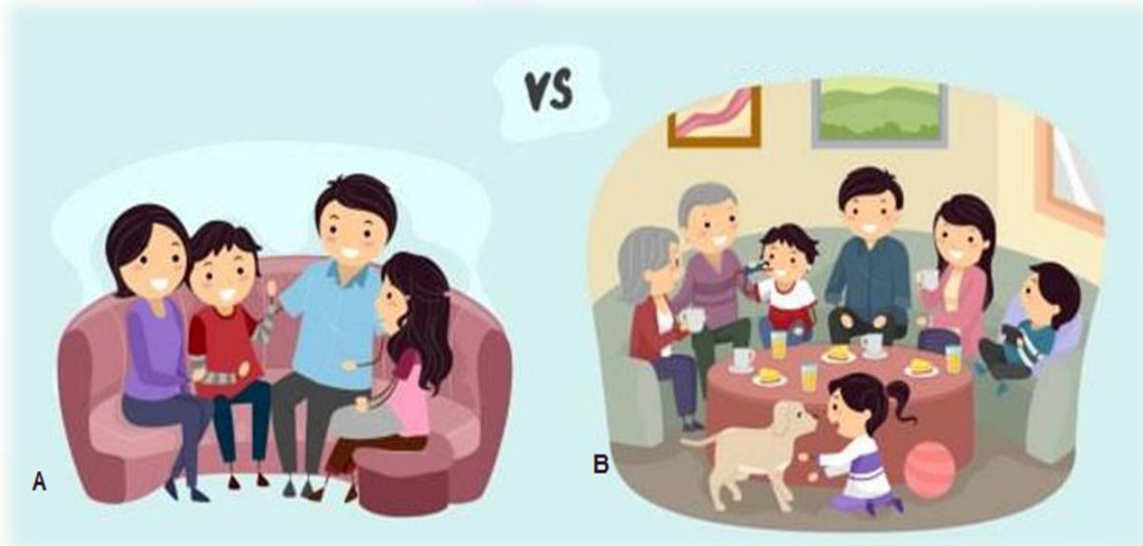
What do you think caused the flower to turn blue when it was placed in blue water?

Write your observation and answer the question in your notebook.

EVS ACTIVITY: 2

WRITTEN ASSESSMENT

Look at the picture given below and answer the following questions in your notebook -



Q1. Identify the families in 'A' and 'B'.

Q2. According to you, which type of family is better? Write any 5 points.

EVS ACTIVITY: 3
ART INTEGRATED

Imagine you are the head of your class. You have to give speech about "Go Green and Get Clean". List your roles in your notebook to keep your school environment clean and green.

Use your creativity to decorate it.



DO YOU KNOW?

The 2030 Agenda for Sustainable Development, adopted by all United Nations members in 2015, created 17 Sustainable Development Goals. They were created with the aim of "peace and prosperity for people and the planet..." – while tackling climate change and working to preserve oceans and forests. The above activity is based on -

GOAL 15 – Life on land



EVS ACTIVITY: 4
SUBJECT ENRICHMENT TASK

Make the model according to your roll no.

IV A	
Roll No.	Working model/Chart paper
1 to 4	Model of types of houses (any one)
5 to 10	Water harvesting model
11 to 14	Different landforms model
15 to 20	Needs of living things chart
21 to 24	E-vehicle charging model
25 to 30	Season craft
31 to 32	Types of fabrics chart paper

IV B	
Roll No.	Working model/Chart paper
1 to 4	“Where do animals live in” chart paper
5 to 10	Maps
11 to 14	Parts of plants in chart paper
15 to 20	Different types of transport
21 to 24	Different clothes & cuisine in chart paper
25 to 31	Food habits of animals of chart paper

NOTE : Prepare at least 5 lines on your model. All the models will be displayed in the month of June in Science Exhibition.



DRAWING

**Do page no. 8-11 in
your drawing book.**



Make a greeting card on Friendship Day –



**"Friends are the most important ingredient
in this recipe of life."**